

4.4: HW6: Prism or pyramid

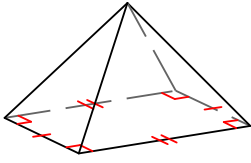
Name: _____

Group: _____

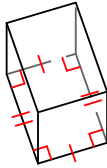
* Choose whether the shape is a prism or a pyramid.
Place your answer right under the figure.



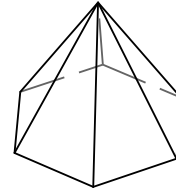
1)



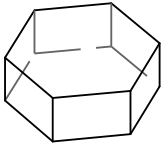
7)



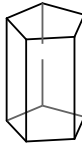
13)



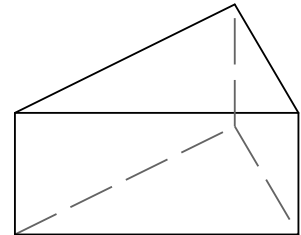
2)



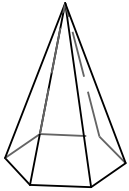
8)



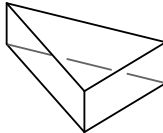
14)



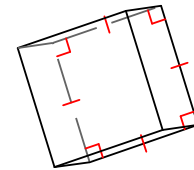
3)



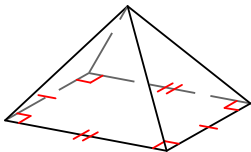
9)



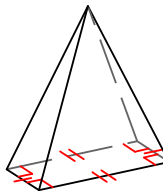
15)



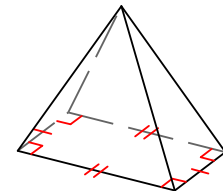
4)



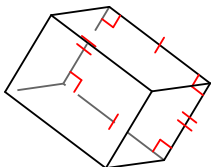
10)



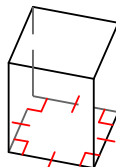
16)



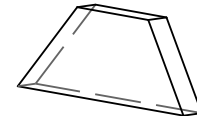
5)



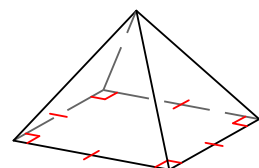
11)



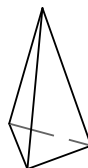
17)



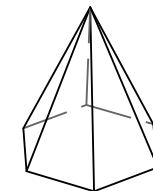
6)



12)



18)



4.4: HW6: Prism or pyramid

