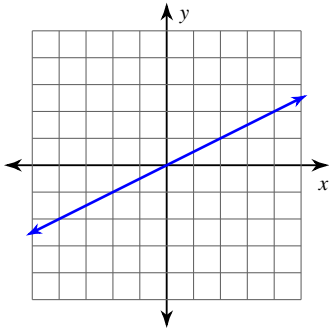
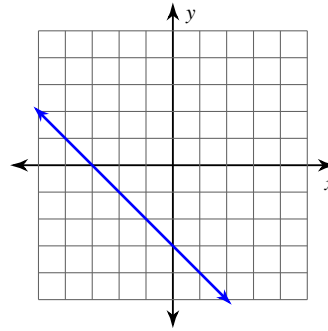


Find the line of equation for each question.

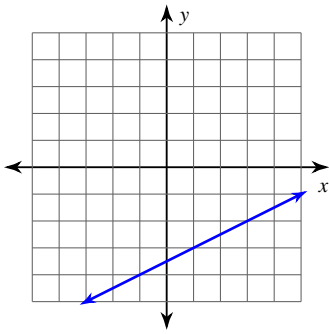
1)



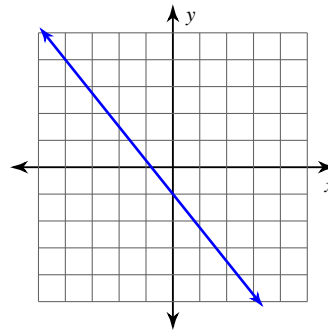
2)



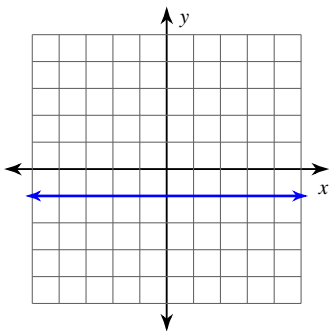
3)



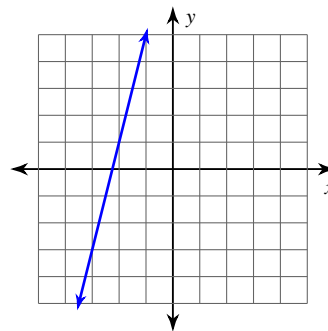
4)



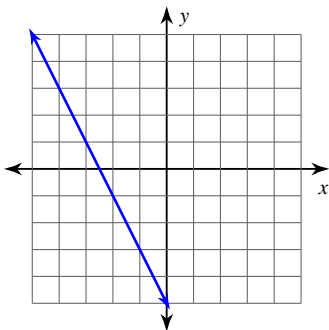
5)



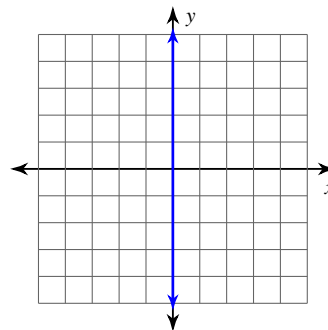
6)



7)



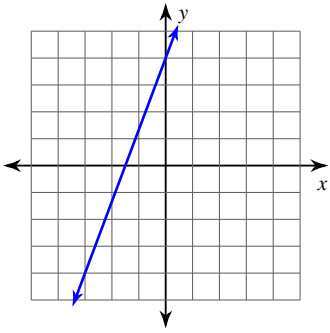
8)



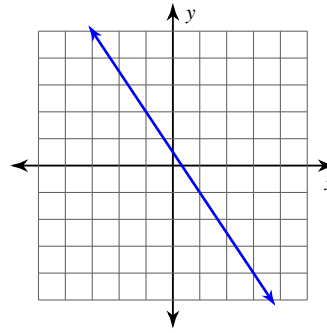
## 13.4: Line of equation

---

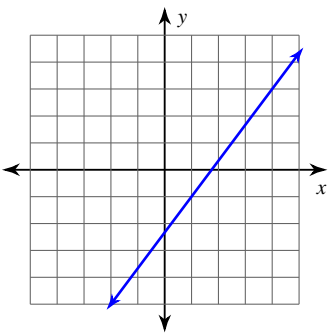
9)



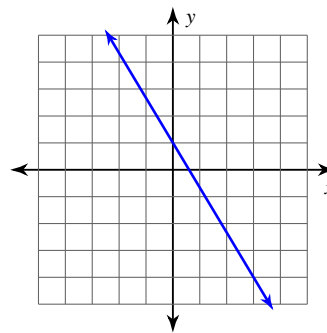
10)



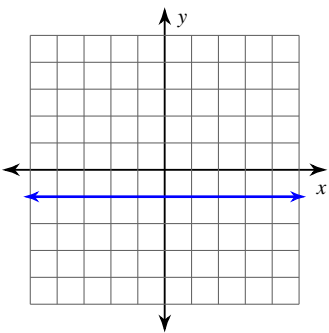
11)



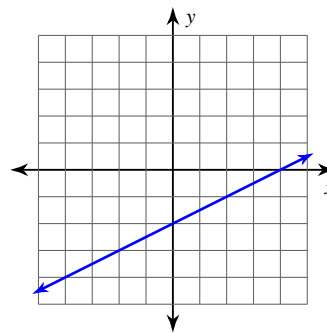
12)



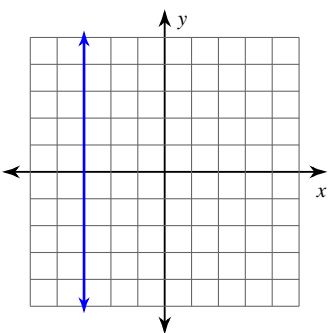
13)



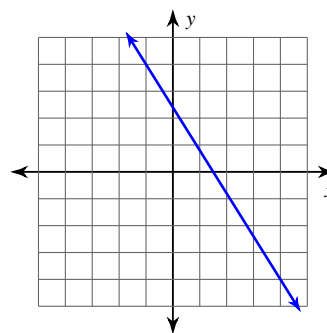
14)



15)



16)



1)  $\frac{1}{2}$

2)  $-1$

3)  $\frac{1}{2}$

4)  $-\frac{5}{4}$

5)  $0$

6)  $4$

7)  $-2$

8) Undefined

9)  $\frac{8}{3}$

10)  $-\frac{3}{2}$

11)  $\frac{4}{3}$

12)  $-\frac{5}{3}$

13)  $0$

14)  $\frac{1}{2}$

15) Undefined

16)  $-\frac{8}{5}$